



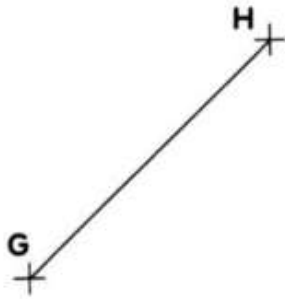
**2** Trace un triangle quelconque DEF.



**3** Trace un triangle rectangle LMN.



**4** Trace un triangle équilatéral GHI.



**5** Trace un triangle isocèle ABC.

