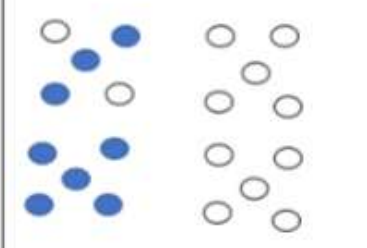
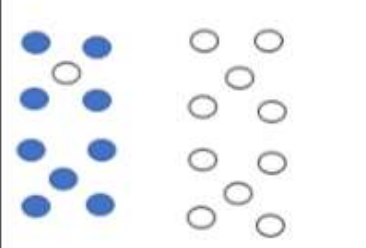
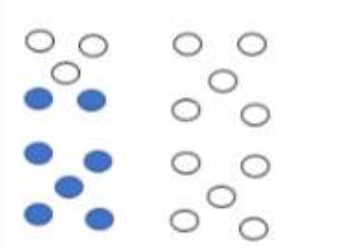
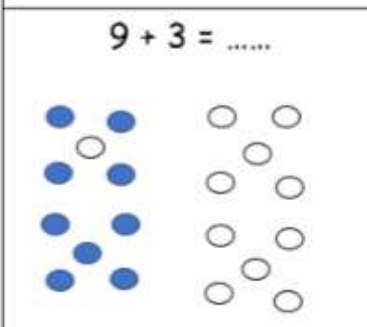
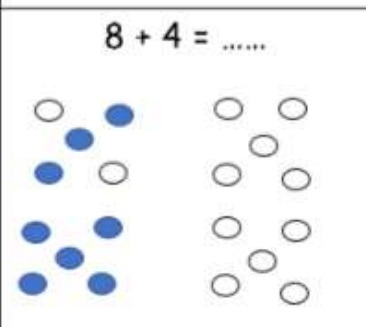
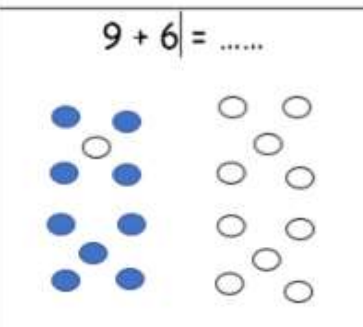


Date : / /

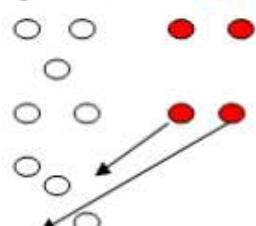
Prénom :

MATHEMATIQUES

1. Colorie en rouge les points manquants, entoure le paquet de 10 puis complète l'addition.

$8 + 3 = \dots$ 	$9 + 4 = \dots$ 	$7 + 5 = \dots$ 
$9 + 3 = \dots$ 	$8 + 4 = \dots$ 	$9 + 6 = \dots$ 

2. Regarde le modèle puis complète les additions en détaillant ton calcul et en entourant les 2 nombres qui font 10.

$$8 + 4 = 8 + 2 + 2 = 10 + 2 = 12$$


$9 + 5 = 9 + \dots + \dots = 10 + \dots = \dots$

$7 + 5 = 7 + \dots + \dots = 10 + \dots = \dots$

$8 + 3 = 8 + \dots + \dots = 10 + \dots = \dots$

$9 + 6 = 9 + \dots + \dots = 10 + \dots = \dots$